

REVIEW QUESTIONNAIRE SCIENCE

DATE: _____

NAME: _____

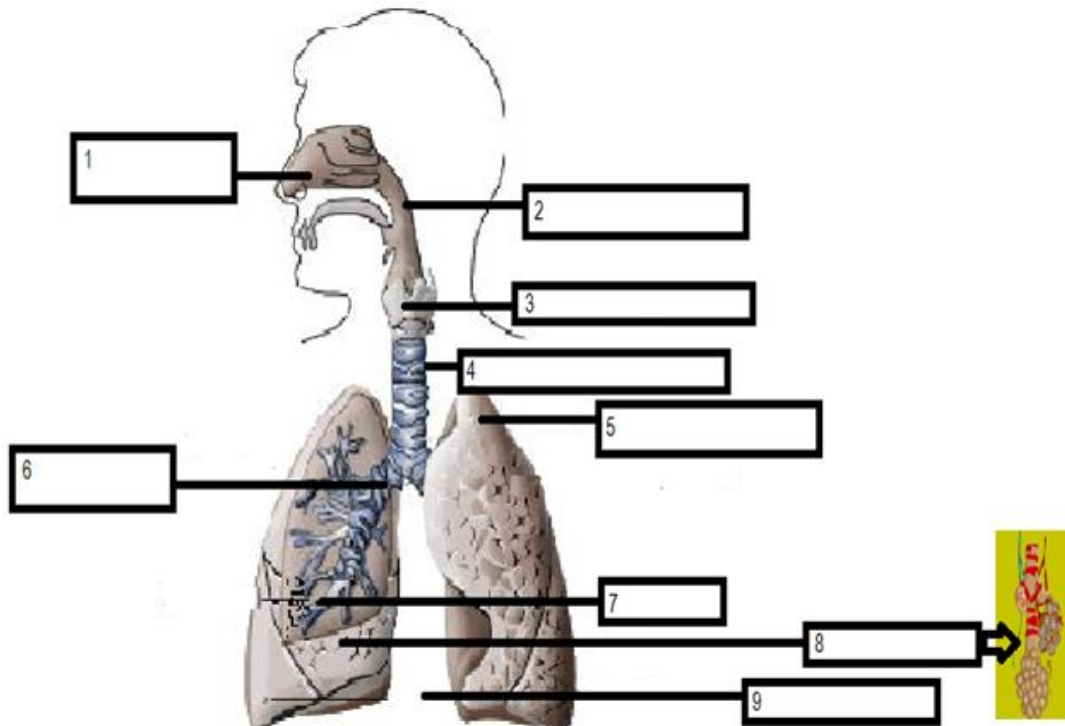
RESPIRATORY SYSTEM

1. Label the parts of the Respiratory system



The Respiratory System

Label the parts of the human respiratory system



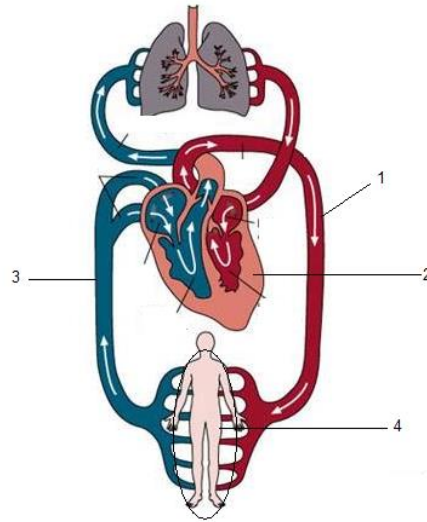
2. Complete the chart

IMPORTANCE	ORGANS AND FUNCTIONS	DISEASES
Why is respiratory system important?		

CIRCULATORY SYSTEM



The Circulatory System

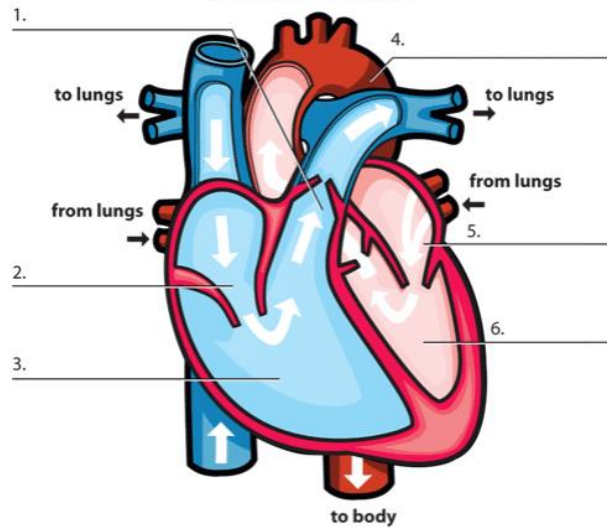


CAPILLARIES – ARTERIES – HEART - VEINS

HOW THE BODY WORKS

The Heart

Directions: Print out, label the parts of the heart, and circle the four valves.



WORD BANK

left ventricle	right atrium	pulmonary artery
right ventricle	left atrium	aorta

IMPORTANCE	ORGANS AND FUNCTIONS	DISEASES
<p>Why is circulatory system important?</p>		

THIRD PART: RELATIONSHIP

3. How are related body systems (respiratory, circulatory, digestive)
